




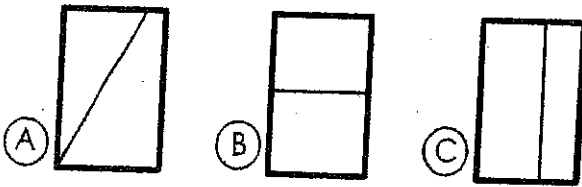
SUMMER PACKET

I'M GETTING READY FOR 2ND GRADE!



Name: _____

1 Which shape shows equal parts?



4 Which real-life container holds the most liquid?



2 If tomorrow is Sunday, then today must be ____.

- (A) Monday (B) Saturday

5 There are 13 ducks in the pond. If 6 ducks fly away, how many ducks are left in the pond?

3

$$\begin{array}{r} 11 \\ + 3 \\ \hline \end{array}$$
$$\begin{array}{r} 15 \\ - 9 \\ \hline \end{array}$$
$$\begin{array}{r} 7 \\ + 8 \\ \hline \end{array}$$

_____ = _____
_____ ducks

Read the passage. Answer the questions.

Dogs for Pets

Dogs can make good pets if you take care of them. They need food and water. They need time to play and exercise. They also need a safe and clean place to live. Taking good care of a dog will make it a happy pet.

8 What do dogs need to live?

- (A) toys
(B) food and water
(C) a bed

9 Why do you need to take good care of your dog?

- (A) The dog will be happy.
(B) The dog will never leave you.
(C) The dog will always be good.

6 What is the main idea?

- (A) Dogs like to play.
(B) Dogs need food and water.
(C) Dogs need a lot of care.

10 Which word belongs in the blank?
Dogs need _____ play.

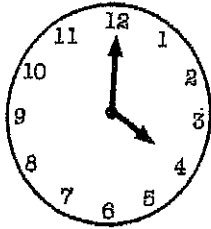
- (A) time
(B) go
(C) to

7 What do dogs like to do?

- (A) play
(B) run away
(C) help clean


1 Grace has 4 dimes, 2 nickels and 3 pennies in her pocket. How much money does she have in all?

2 Write the time.



$$\begin{array}{r} 15 \\ - 9 \\ \hline \end{array} \quad \begin{array}{r} 12 \\ - 4 \\ \hline \end{array} \quad \begin{array}{r} 5 \\ + 6 \\ \hline \end{array}$$

4 How many counters do the ten-frames show?



_____ counters

circle one: odd even

5 Circle the seventh letter.

A B C D E F G H I J

Read the passage. Answer the questions.

Frog Looks and Looks

Frog is sad because he lost his glasses. He looks under his bed. He looks in his desk. He looks everywhere but can't find them anywhere. Frog gets really tired and decides to go to bed. He goes to the bathroom to brush his teeth. He looks at himself in the mirror and laughs. His glasses are on top of his head!

6 Where does this story take place?

- (A) in the garden
- (B) in the classroom
- (C) in Frog's home

7 Why is Frog sad?

- (A) He can't find his glasses.
- (B) He reads a sad book.
- (C) He is really tired.

8 What does Frog do last?

- (A) brushes his teeth
- (B) looks under his bed
- (C) watches TV

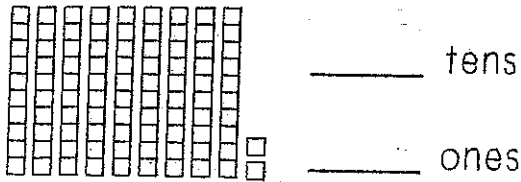
9 Where does Frog find his glasses?

- (A) under his bed
- (B) in his desk
- (C) on top of his head

10 How do you know this story is fantasy?

- (A) The story is about a frog.
- (B) Frog brushes his teeth.
- (C) Frogs are animals.

- 1 Write the number of blocks as tens and ones.



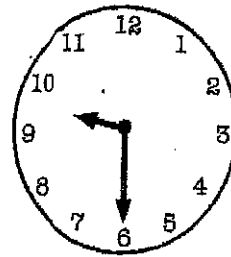
- 2 Circle the smallest number.

87 46 78

3

13	11	8
+ 3	- 4	+ 6

- 4 Which clock shows the same time?



- 5 Adam has 12 pennies. He loses 5 of his pennies. How many pennies does he have now?

_____ pennies

Read the passage. Answer the questions.

Annie's room was a disaster. There were toys on the floor, books on the bed and clothes on the desk. Her mom said, "Your room is a mess! You have to clean it now or you won't get to play." Annie spent two hours picking up her toys, books and clothes and putting them away. When Annie's mom came back, she smiled and said, "Your room looks much better!"

- 6 Who is the main character?

- (A) Annie
(B) Mom
(C) the bedroom

- 7 What is the setting?

- (A) the kitchen
(B) at school
(C) Annie's bedroom

- 8 What is Annie's problem?

- (A) Annie has a lot of homework.
(B) Annie's room is too messy.
(C) Annie's mom is too busy.

- 9 How does Annie fix the problem?

- (A) Annie's friend helps her.
(B) Annie's mom cleans her room.
(C) Annie puts her stuff away.

- 10 What is this story mostly about?

- (A) Annie cleans her room.
(B) Annie puts her clothes away.
(C) Annie's mom is mad.


1 Find the pattern. Write the missing numbers.

6 8 10 ___ 14 ___ 18 20

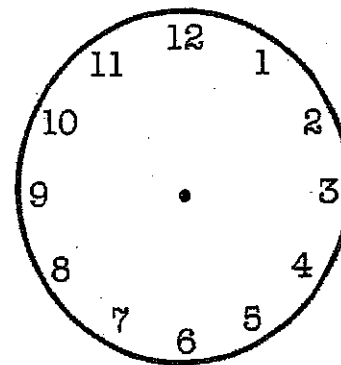
4 Write how much money in all.



2 Which object weighs less?

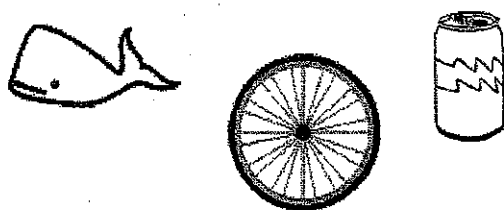


5 Draw clock hands to show 3:00.



3 $9 - 2 =$ ___ $7 + 5 =$ ___

6 Circle all the pictures that begin with *wh*.



8 Mark the sight word that completes the sentence.

I watched the movie ___.

- (A) one (B) once (C) good

7 Mark the word that has the same beginning sound as *hop*.

- (A) pin (B) hand (C) pot

9 Mark the noun that completes the sentence.

The ___ runs really fast.

- (A) house (B) pencil (C) girl

10 Rewrite the sentence with correct capitalization, spelling and punctuation.

The bus takes matt to work?

SUMMER WORK

Pick your favorite story. Read it again
and do the book report attached.

Make sure it is nice and neat!



Name _____

Title: _____

Author: _____

Characters: _____

This book is about _____

© Carson-Dellosa Publ. CD-0916



Draw a picture from your story on the back

